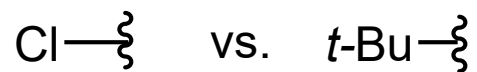
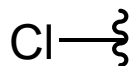


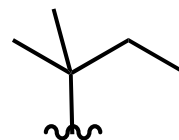
For each pair, which substituent would have the higher priority?



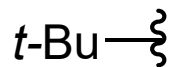
A) higher priority groups are:



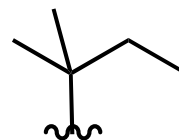
and



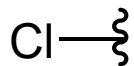
B) higher priority groups are:



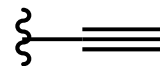
and



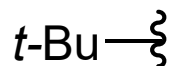
C) higher priority groups are:



and



D) higher priority groups are:



and

